




$10 : \underline{\quad} = \underline{\quad}$




$9 : \underline{\quad} = \underline{\quad}$




$14 : \underline{\quad} = \underline{\quad}$




$20 : \underline{\quad} = \underline{\quad}$



$14 : \underline{\quad} = \underline{\quad}$




$8 : \underline{\quad} = \underline{\quad}$




Nombre: _____



$$\underline{\quad} : \underline{\quad} = 15$$




$$\underline{\quad} : \underline{\quad} = 13$$




Sobra 1


$$24 : \underline{\quad} = \underline{\quad}$$



$$36 : \underline{\quad} = \underline{\quad}$$




$$\underline{\quad} : \underline{\quad} = 10$$



Sobra 1


$$24 : \underline{\quad} = \underline{\quad}$$




Nombre: _____




$$\underline{\quad} : \underline{\quad} = 6$$




$$\underline{\quad} : \underline{\quad} = 4$$




$$13 : \underline{\quad} = \underline{\quad}$$




$$31 : \underline{\quad} = \underline{\quad}$$



$$\underline{\quad} : \underline{\quad} = 5$$



$$40 : \underline{\quad} = \underline{\quad}$$




Sobran 2


Nombre: _____



$$\underline{\quad} : \underline{\quad} = 15$$



$$\underline{\quad} : \underline{\quad} = 13$$



$$\underline{\quad} : \underline{\quad} = 5$$




Sobran 3

$$24 : \underline{\quad} = \underline{\quad}$$




$$\underline{\quad} : \underline{\quad} = 15$$



Sobra 1


$$24 : \underline{\quad} = \underline{\quad}$$




Nombre: _____




$$\underline{\quad} : \underline{\quad} = \underline{\quad}$$



$$25 : \underline{\quad} = \underline{\quad}$$



$$62 : \underline{\quad} = \underline{\quad}$$



Tengo 53 lápices y los reparto entre 5 compañeros.

Nombre: _____



$$\underline{\quad} : \underline{\quad} = \underline{\quad}$$

$$\underline{\quad} : \underline{\quad} = \underline{\quad}$$

$$\underline{\quad} : \underline{\quad} = \underline{\quad}$$

Conseguí 23 pegatinas y las voy a repartir a partes iguales entre tres amigos.

Voy a repartir 18 cuentos entre los tres grupos de lectura que hay en clase. Tengo que dar a cada grupo el mismo número de cuentos.

Voy a colocar 63 lápices de colores entre 5 botes a partes iguales.

Nombre: _____

